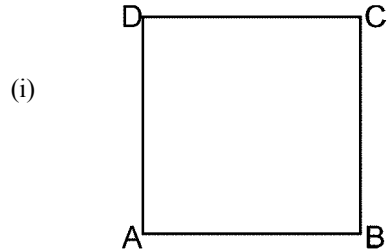


Time: 10 Minutes	Paper Math 3	Total Marks: 10
-------------------------	---------------------	------------------------

6th Month, 1st Week, 3rd Day	Syllabus: Unit 6. Exercise # 2. Q # 1, 2.
------------------------------	--

Q.1. Write name of the figure, measure the length of its sides then find the perimeter of following. (10)

شکل کا نام لکھیں۔ اضلاع کی لمبائیوں کی پیمائش کریں اور احاطہ معلوم کریں۔



Name = _____

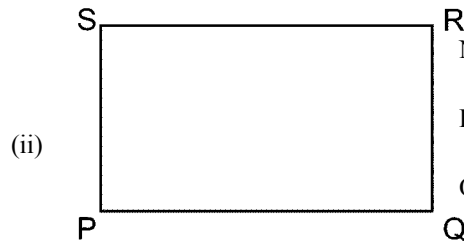
AB = _____

BC = _____

CD = _____

AD = _____

Perimeter = _____



Name = _____

PQ = _____

QR = _____

RS = _____

PS = _____

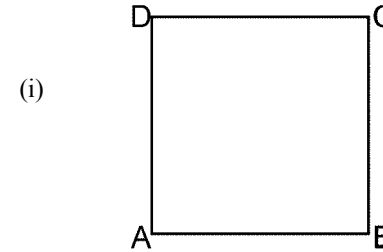
Perimeter = _____

Time: 10 Minutes	Paper Math 3	Total Marks: 10
-------------------------	---------------------	------------------------

6th Month, 1st Week, 3rd Day	Syllabus: Unit 6. Exercise # 2. Q # 1, 2.
------------------------------	--

Q.1. Write name of the figure, measure the length of its sides then find the perimeter of following. (10)

شکل کا نام لکھیں۔ اضلاع کی لمبائیوں کی پیمائش کریں اور احاطہ معلوم کریں۔



Name = _____

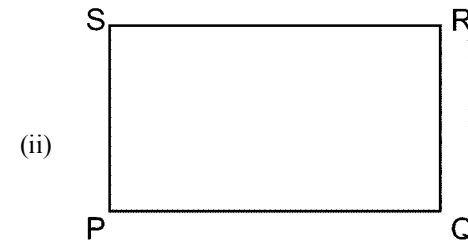
AB = _____

BC = _____

CD = _____

AD = _____

Perimeter = _____



Name = _____

PQ = _____

QR = _____

RS = _____

PS = _____

Perimeter = _____